

OXFORD CAMBRIDGE AND RSA EXAMINATIONS

**Advanced Subsidiary General Certificate of Education
Advanced General Certificate of Education**

MATHEMATICS

4736

Decision Mathematics 1

Specimen Paper

Additional materials:
Answer booklet
Graph paper
List of Formulae (MF 1)

TIME 1 hour 30 minutes

INSTRUCTIONS TO CANDIDATES

- Write your Name, Centre Number and Candidate Number in the spaces provided on the answer booklet.
- Answer **all** the questions.
- Give non-exact numerical answers correct to 3 significant figures, unless a different degree of accuracy is specified in the question or is clearly appropriate.
- You are permitted to use a graphic calculator in this paper.

INFORMATION FOR CANDIDATES

- The number of marks is given in brackets [] at the end of each question or part question.
- The total number of marks for this paper is 72.
- Questions carrying smaller numbers of marks are printed earlier in the paper, and questions carrying larger numbers of marks later in the paper.
- **You are reminded of the need for clear presentation in your answers.**

This question paper consists of 4 printed pages and an insert.

- 1 The graph K_5 has five nodes, A, B, C, D and E , and there is an arc joining every node to every other node.
- (i) Draw the graph K_5 and state how you know that it is Eulerian. [2]
- (ii) By listing the arcs involved, give an example of a **path** in K_5 . (Your path must include more than one arc.) [1]
- (iii) By listing the arcs involved, give an example of a **cycle** in K_5 . [1]
- 2 This question is about a simply connected network with at least three arcs joining 4 nodes. The weights on the arcs are all different and any direct paths always have a smaller weight than the total weight of any indirect paths between two vertices.
- (i) Kruskal's algorithm is used to construct a minimum connector. Explain why the arcs with the smallest and second smallest weights will always be included in this minimum connector. [3]
- (ii) Draw a diagram to show that the arc with the third smallest weight need not always be included in a minimum connector. [4]
- 3 (i) Use the shuttle sort algorithm to sort the list

6 3 8 3 2

into increasing order. Write down the list that results from each pass through the algorithm. [5]

- (ii) Shuttle sort is a quadratic order algorithm. Explain briefly what this statement means. [3]
- 4 [Answer this question on the insert provided.]

An algorithm involves the following steps.

Step 1: Input two positive integers, A and B .
Let $C = 0$

Step 2: If B is odd, replace C by $C + A$.

Step 3: If $B = 1$, go to step 6.

Step 4: Replace A by $2A$.

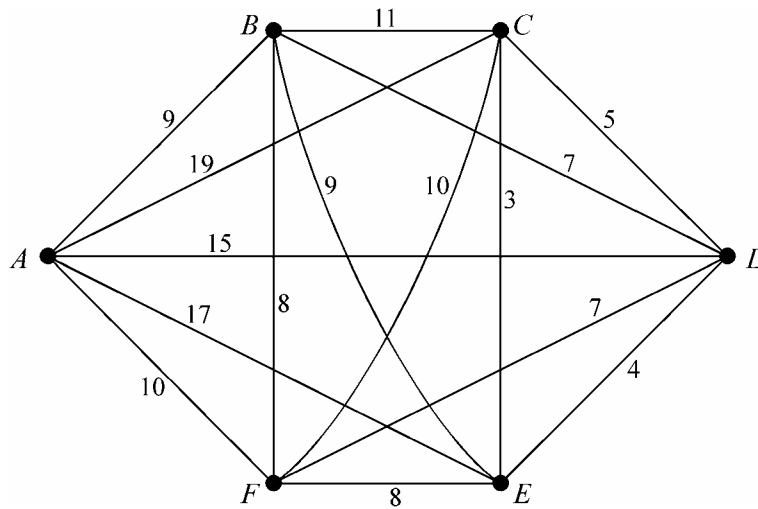
If B is even, replace B by $B \div 2$, otherwise replace B by $(B - 1) \div 2$.

Step 5: Go back to step 2.

Step 6: Output the value of C .

- (i) Demonstrate the use of the algorithm for the inputs $A = 6$ and $B = 13$. [5]
- (ii) When $B = 8$, what is the output in terms of A ? What is the relationship between the output and the original inputs? [4]

5 [Answer this question on the insert provided.]



In this network the vertices represent towns, the arcs represent roads and the weights on the arcs show the shortest distances in kilometres.

- (i) The diagram on the insert shows the result of deleting vertex F and all the arcs joined to F . Show that a lower bound for the length of the travelling salesperson problem on the original network is 38 km. [4]

The corresponding lower bounds by deleting each of the other vertices are:

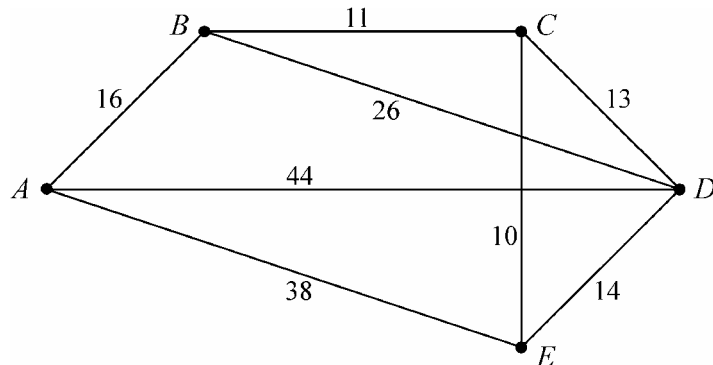
$$A : 40 \text{ km}, \quad B : 39 \text{ km}, \quad C : 35 \text{ km}, \quad D : 37 \text{ km}, \quad E : 35 \text{ km} .$$

The route $A-B-C-D-E-F-A$ has length 47 km.

- (ii) **Using only this information**, what are the best upper and lower bounds for the length of the solution to the travelling salesperson problem on the network? [2]
- (iii) By considering the orders in which vertices C , D and E can be visited, find the best upper bound given by a route of the form $A-B- \dots -F-A$. [3]

- 6 [Answer part (i) of this question on the insert provided.]

The diagram shows a simplified version of an orienteering course. The vertices represent checkpoints and the weights on the arcs show the travel times between checkpoints, in minutes.



- (i) Use Dijkstra's algorithm, **starting from checkpoint A**, to find the least travel time from A to D. You must show your working, including temporary labels, permanent labels and the order in which permanent labels were assigned. Give the route that takes the least time from A to D. [6]
- (ii) By using an appropriate algorithm, find the least time needed to travel **every arc** in the diagram starting and ending at A. You should show your method clearly. [6]
- (iii) Starting from A, apply the nearest neighbour algorithm to the diagram to find a cycle that visits every checkpoint. Use your solution to find a path that visits every checkpoint, starting from A and finishing at D. [3]

- 7 Consider the linear programming problem:

$$\begin{array}{ll} \text{maximise} & P = 4y - x, \\ \text{subject to} & x + 4y \leq 22, \\ & x + y \leq 10, \\ & -x + 2y \leq 8, \\ \text{and} & x \geq 0, y \geq 0. \end{array}$$

- (i) Represent the constraints graphically, shading out the regions where the inequalities are **not** satisfied. Calculate the value of x and the value of y at each of the vertices of the feasible region. Hence find the maximum value of P , clearly indicating where it occurs. [8]
- (ii) By introducing slack variables, represent the problem as an initial Simplex tableau and use the Simplex algorithm to solve the problem. [10]
- (iii) Indicate on your diagram for part (i) the points that correspond to each stage of the Simplex algorithm carried out in part (ii). [2]

Candidate Name	Centre Number	Candidate Number



OXFORD CAMBRIDGE AND RSA EXAMINATIONS

**Advanced Subsidiary General Certificate of Education
Advanced General Certificate of Education**

MATHEMATICS

4736

Decision Mathematics 1

INSERT for Questions 4, 5 and 6

Specimen Paper

INSTRUCTIONS TO CANDIDATES

- This insert should be used to answer Questions **4, 5** and **6 (i)**.
- Write your Name, Centre Number and Candidate Number in the spaces provided at the top of this page.
- Write your answers to Questions **4, 5** and **6 (i)** in the spaces provided in this insert, and attach it to your answer booklet.

This insert consists of 4 printed pages.

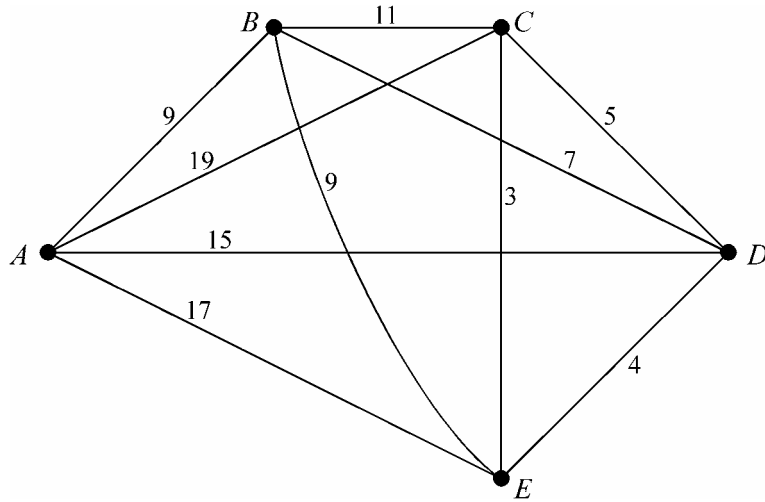
4 (i)

STEP	A	B	C
1			
2			

(ii)

STEP	A	B	C
1			
2			

5 (i)



.....

.....

.....

.....

(ii) Upper bound = km

Lower bound = km

(iii)

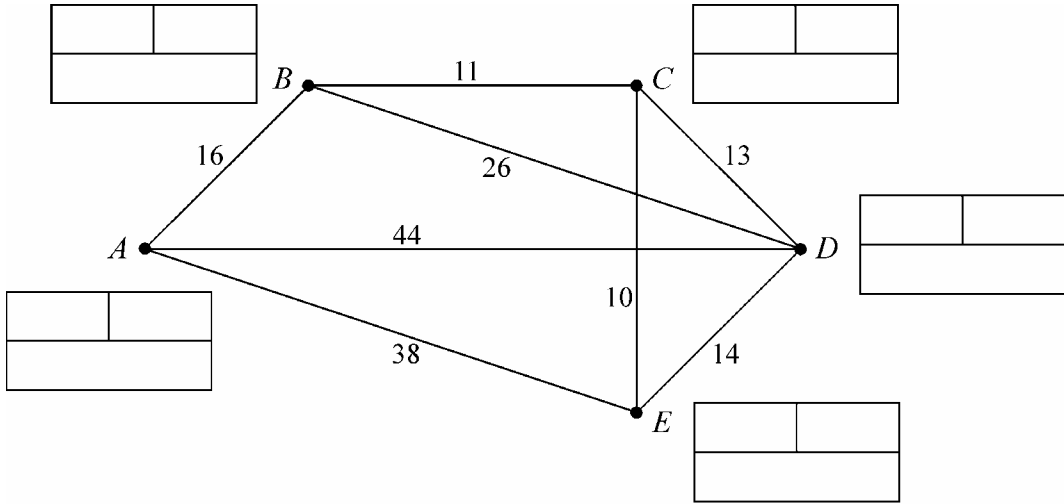
.....

.....

.....

Best upper bound = km


6 (i)



Key:

Order of becoming permanent

Permanent value



Temporary values
(do not cross out working)

.....

.....

.....

.....

.....

Least travel time = minutes

Route: A - - D